

2015 年雅思写作题目汇总（更新至 11.21）

10/1

Task 1 柱图 The bar chart shows percentage of adults of different age groups in the UK who used the internet every day from 2003-2006.

Task 2 社会问题 观点类 The leaders of directions of organizations are often older people. But some people say that young people can also be a leader. To what extent do you agree or disagree.

17/1

Task 1. 线图 The line graph shows the sales of children's books, adult's fictions and educational books between 2002 and 2006 in one country.

Task 2. 社会问题 讨论类 Some people think that the amount of noise people make have to be controlled strictly, others say that people are free to make as much as they wish. Discuss both sides and give your opinion.

7/2

A类小作文混合图(柱图+表格) 对比2008年英国男女性平均花在Household Activity和在Leisure Activity 的时间。

大作文 report 题型 Many museums and historical sites are mainly visited by tourists, not local people. Why? What can be done to attract local people?

G 类小作文, 写求职信, 关于 volunteer 照顾 local community 的小孩, 为什么感兴趣为什么认为自己适合和 details of availability

大作文 computer 对人们生活的好处和坏处

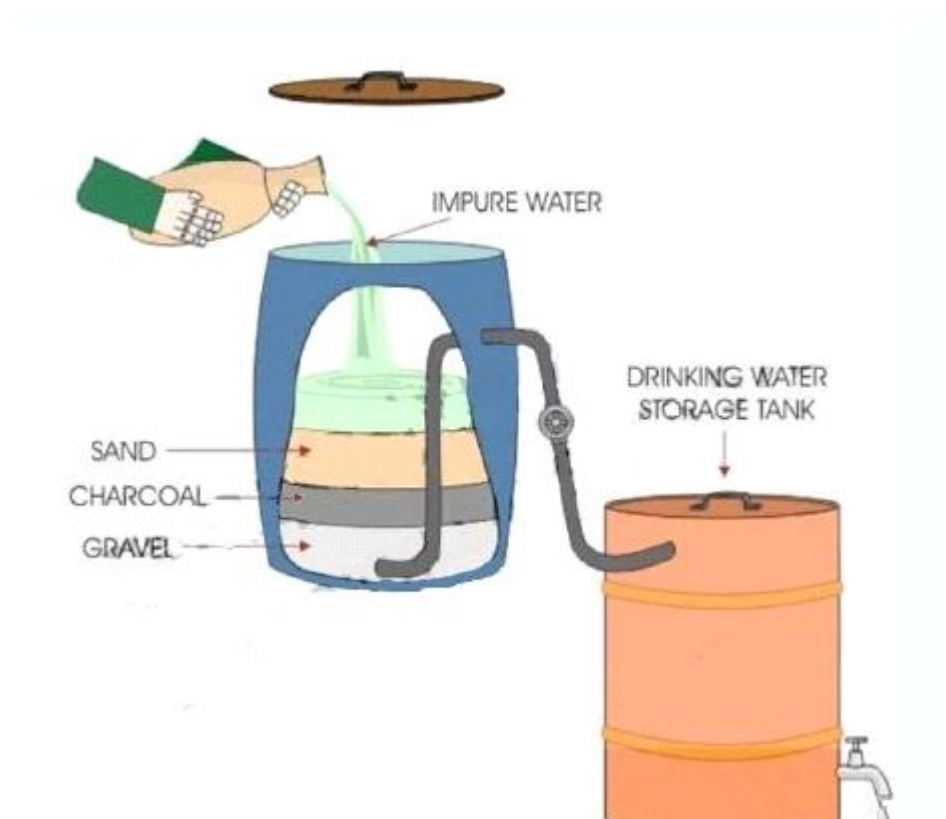
12/2

A 类小作文:双图, 对比 2008 年英国男女性平均花在 Household Activity 和在 Leisure Activity 的时间, 单位分钟每天

A 类大作文:有些人认为,为了保证道路安全,应该增加最小开车年纪。
Some people think that the age limit for driving should be increased in order to make driving safer. To what extent do you agree or disagree?

14/2

小作文 The diagram below illustrates how a simple water filter is constructed and how it functions to produce clean drinking water.



大作文The use of mobile phone is as antisocial as smoking.
Smoking is banned in certain places so mobile should be banned like smoking.To what extend do agree or disagree?

28/2

A 类小作文柱图

Bar chart, the percentage of spending on three categories: food and drinks, accommodation and entertainment in 5 age groups

A 类大作文 Some students take one year off between finishing school and going to university, in order to travel or to work. Do you think advantages outweigh disadvantages?

G 类小作文 You are organizing a party. Write a letter to your friend and invite him to come to your party. You should say: Explain why you hold this party; when will be held and why you invite him to attend this party.

G 类大作文 As part of their education, students work for a company in a short time without pay. Do you think more advantages or more disadvantages between students and

12/3

Task 1

The table describes the changes of people who went for international travel in 1990, 1995, 2000 and 2005. (million)

Task 2

Some people think that it is more important to plant more trees in open area in towns and cities than build more housing. To what extent do agree or disagree?

14/3

Task1 柱图 The charts compare resources to make 10000 disposable cups in two different materials: polystyrene and paper

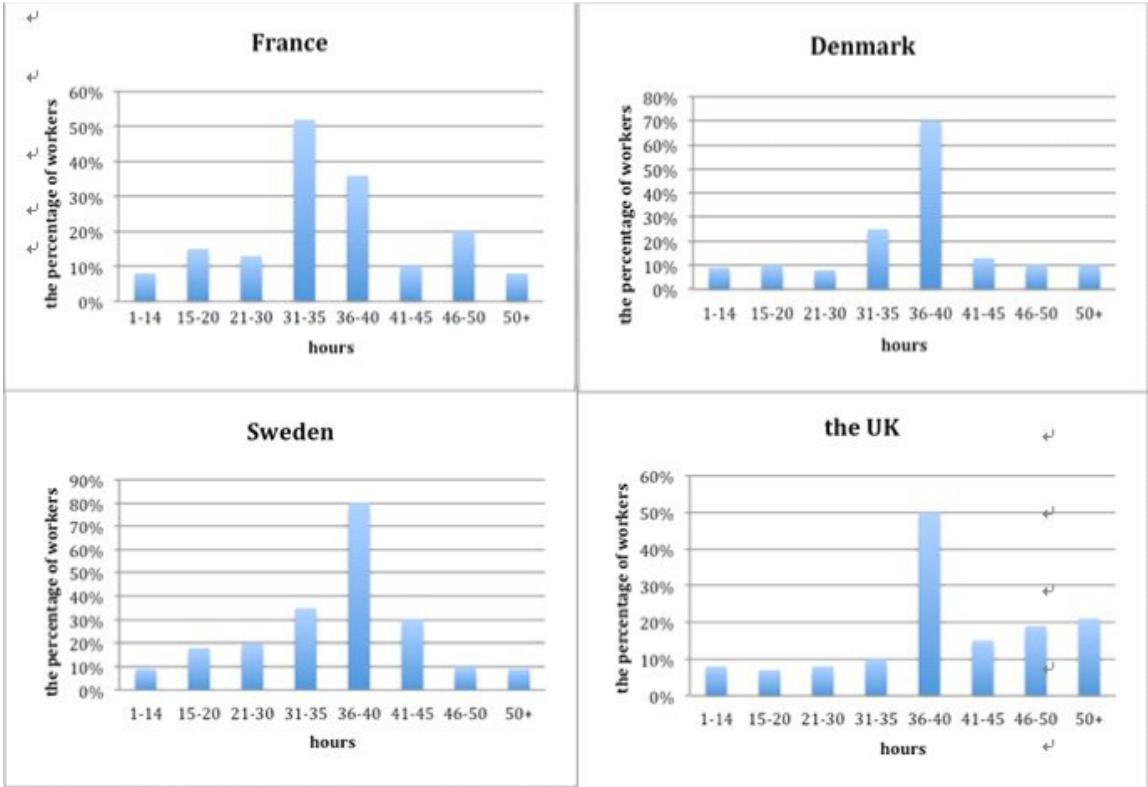
Task 2 教育类 Some working parents believe childcare centers can provide best care for children, others think other family members like grandparents can do. Discuss both views and give your own opinion.

Task 1 地图题写作分析 地理变迁题, 不需要按照时间来写, 而应该按照对象词来写, 这样才对。 写作思路 时态容易出错误, 如果题目中有未来的时间, 一定要记得改变时态。

Task 2

Some people believe famous people’s support towards international aids organizations draws the attention to problems. Others think celebrities make the problems less important. Discuss both sides and give your opinion? 题目翻译: 有人认为名人对于国际援助的支持引发更多关注。另一些人却认为名人使得原本问题的 重要性下降。对双方进行讨论并给出你自己的观点。

Task1:The charts below show the number of working hours per week in industrial sector in four European countries in 2002.



Task 2

Some people say that communication by using computers and phones will have negative effects on young people's writing and reading skills. Do you agree or disagree?

11/4


Writing

Task 1

Type of Questions	混合（柱图+线图）
-------------------	-----------

题目：

The line graph and the bar chart give the information and forecast about CO₂ emission in England and Wales between 2000 and 2020.



Task 2

Topic	社会问题
-------	------

Type of Questions	综合类
-------------------	-----

题目：

Nowadays, more and more old people who need employment have to do the same job with young people.

What problems will be caused? What would be the solutions for it?

18/4

Task 1 表格题 The table shows the population ratio of males per 100 females in

six different areas in 1995 and 2005.

Task 2 教育类 Some people think only students who achieve the best academic results should be rewarded, others think it is more important to reward students who show improvement, Discuss both sides and give your own opinion.

16/5

A 类小作文 饼图, USA 和日本从不同国家进口衣服所占比例的两个年份的对比

A 类大作文: 走路是维持健康的生活方法之一, 为什么现在越来越少的人走路, 解决方法。

30/5

A 类小作文: 表格, numbers of visitors to and from the UK and amount of money they spent

A 类大作文: some people think computers and the internet are more important in child's education. Others believe that schools and teachers are essential for children to learn. Discuss both views and give your opinion.

G 类小作文: enquiry about a language class

G 类大作文: 便宜飞机票好还是不好? discuss both views and give your opinion.

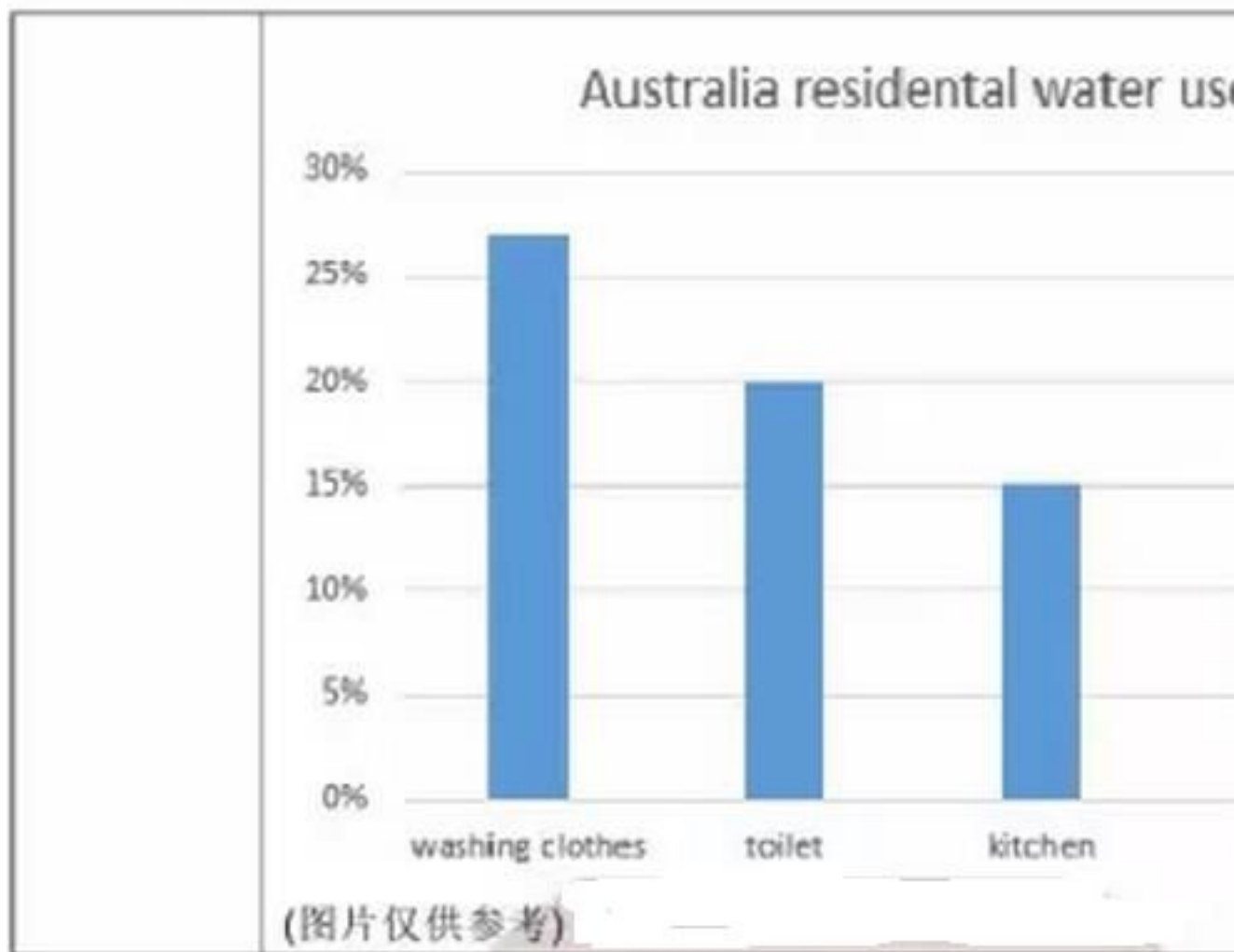
6/6

Task1: percentage of car ownership in an European country during 1971 and 2006 (线图)

Task2: In some countries, more and more people want to study at university. Competition of university places is increasing. Why do people want to study at university? Do you think that competition of university places is a positive or negative development?

Part1: 混合图 (饼+柱)

图表类型:	混合图（饼柱）
作文题目:	Water consumption and water residential use in Au
作文图片	<div><p>water consumption in Austr</p><p>■ Industrial ■ Government ■ Residential ■</p></div>



Part2: Because of traffic and housing problems in the cities, the government encourages business move to the rural area. Do you think the advantages outweigh the disadvantages?

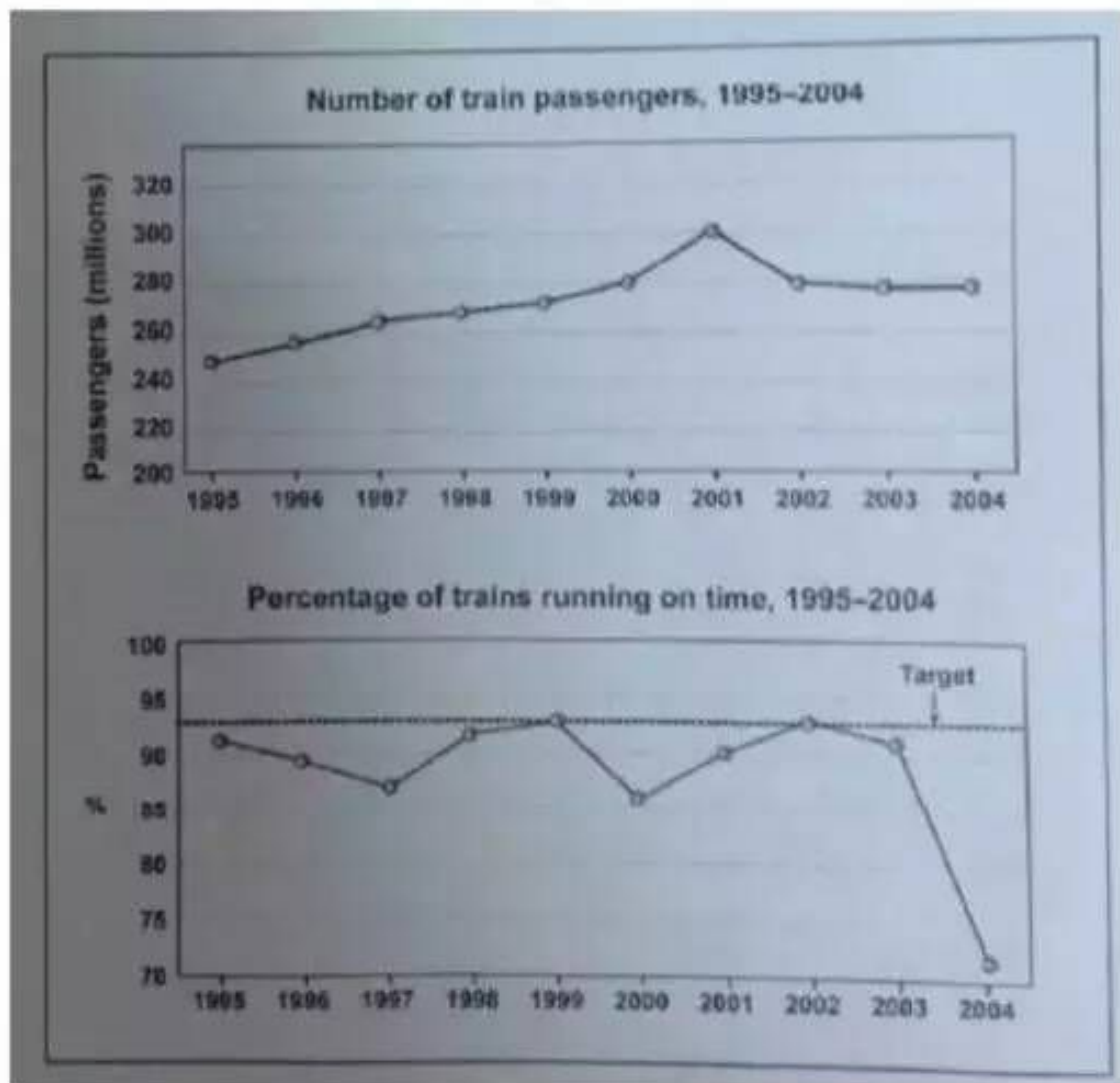
18/6

A 类小作文: 线柱组合图

A 类大作文: We should return to traditional and older values of respect for family and community. To what extent do you agree or disagree?

27/6

Task 1



The first graph gives the number of passengers travelling by train in Sydney. The second graph provides information about the percentage of trains running on time.

Task 2 Many people nowadays do not feel safe either when they are at home or go out. What are the reasons and what to do to solve this problem?


Writing

Task 1

Type of Questions 线图

题目:

The graph shows the number of overseas visitors to three areas in E and 2007.



Task 2

Topic 广告媒体

Type of Questions 观点类

题目:


Advertising discourages people from being different individually by making them be the same or look the same. To what extent do you agree or disagree?

G类Task1:跟中介租房子

Task2 公司是否应该统一制服、描述哪些职业应该统一制服、描述统一制服的缺点

25/7

Task1: Type:柱状图 Topic: The chart shows the percentage of unemployed people aged between 15 and 24 in five European countries in 2005, with the overall unemployment in 2005.



Task2: Some people say government should give the health care the first priority, some others believe there are more important priorities to spend the tax payers' money. Discuss both views and give your opinion.

1/8

小作文:线图

大作文: the proportion of elderly people in some societies is increasing rapidly. Do you think the negative effect of such trend outweigh the positive effect?

8/8

小作文:表格 对比2002和2003三月到六月电视台广告收入

大作文: in many countries, more and more people have to travel long distance to work every day. What are the reasons? What can be done to solve the problems?

13/8

international travel make people prejudiced more than board-mind, why? how to improve the understanding of countries they visit?

小作文 饼图 不同种类书的销量比率变化

29/8

Task1: bar chart and pie chart

Task2 :A 类 : Some people believe that university education should focus on the skill of employment for the future. Others think should focus academic study only. Discuss both views and give your opinion.

G 类: Some people think advertising is useful and informative, others feel advertising gives false information and increases the price of products. Discuss both views and give your own opinion.

12/9

小作文:流程图

A 类大作文:In some countries old people are highly valued, while in some cultures young people are highly valued. Discuss both views and give your opinion.

G 类大作文:people in different countries have different behaviours(e.g. greetings, table manners, clothings). It is sometimes said that when people go to a different country(e.g. for a business or travel), they should be have like local inhabitants. Do you agree or disagree?

26/9

A 类小作文:线形图题目: The line graph shows the percentage of different age groups of cinema visitors in a particular country.

A 类大作文 :Some people claim that many things children learn at school have actually wasted their time. Other people argue that everything taught at school is useful in the future. discuss both views and give your own opinion.

10/10

A 类小作文:流程图 Water system in Australia now and future

A 类大作文: It is better to go out for a show or concert than stay at home watching TV or using the computer. To what extent do you agree or disagree?
有的人认为没有必要去现场听演唱会, 你认为呢

G 类小作文: 邀请信 邀请你的外国朋友来家里参加派对。派对的主题是庆祝节日。1. 节日有什么意义 2. 派对上有什么安排 3. 为什么邀请他

G 类大作文: Many students take part time job while studying in uni. Do you think it is a good idea or bad idea?

31/10

A 类大作文: Some people think every human being can create art (e.g. Painting), others think only the people born with the ability can create art. Discuss both views and give your opinion. Art only for talented people or every one can create art?

小作文: 柱状图

14/11

A 类小作文: 柱状图, 7 个柱, 关于 2000 年世界上 60 岁以上人口分布以及对 2050 年老年人口的预测

A 类大作文: Economic growth in recent years made some people in both developed countries and developing countries richer. However, research showing that while people in developing countries are happier, people in developed countries seems no happier. Why? What can we learn from it?

21/11

A 类小作文: 线图, 四种房子和比较, 时间轴是 2007-2017, 不同房子的建造数量

A 类大作文: Someone argue that the parents of the children who break the law should be punished in some way, because they are responsible for their children's action. To what extent do you agree or disagree?

G 类小作文:杂志上看到一个文章对你工作很有帮助, 请推荐给你的朋友.
Recommend a useful article you recently read on a magazine to your-friend.

G 类大作文:Some people think giving some spending money to children every week makes them have fewer money problems when they become adults. Do you agree or disagree?

